





## Maths Week London: **KS1 London landmarks QUIZ!**

Look at how tall each of these London landmarks are.

			
London Eye	The Shard	St Paul's Cathedral	Westminster Abbey
<b>135m</b>	<b>310m</b>	<b>111m</b>	<b>69m</b>
			
Tower Bridge	Big Ben	Wembley Stadium	'The Gherkin'
<b>65m</b>	<b>96m</b>	<b>133m</b>	<b>180m</b>

Answer the following questions:



@MathsWeekLDN

























#MathsWeekLDN



@LEO\_Maths

@LEODistanceLearning



a) Which is the tallest?	 135m	 310m	 111m	 69m
	 65m	 96m	 133m	 180m
b) Which is the shortest?	 135m	 310m	 111m	 69m
	 65m	 96m	 133m	 180m
c) Which landmarks have 6 tens?	 135m	 310m	 111m	 69m
	 65m	 96m	 133m	 180m



















@MathsWeekLDN  
#MathsWeekLDN



@LEO\_Maths  
@LEODistanceLearning



d) Which landmarks have 3 tens?	 135m	 310m	 111m	 69m
	 65m	 96m	 133m	 180m
e) Which landmark has all 3 digits the same?	 135m	 310m	 111m	 69m
	 65m	 96m	 133m	 180m

Check your answers when they are released tomorrow!  
How many did you get right? **We would love to hear!**



@MathsWeekLDN  
#MathsWeekLDN



@LEO\_Maths  
@LEODistanceLearning